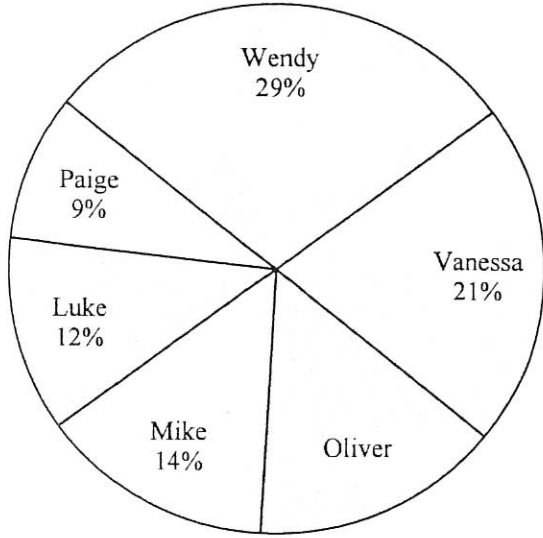




Use the graph to solve.

Class Election Results



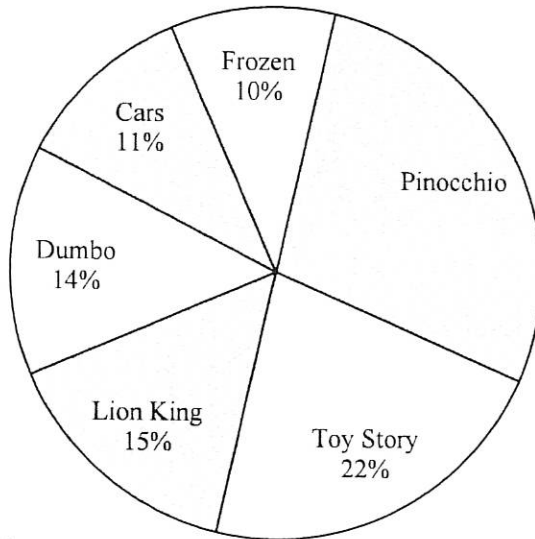
- 1) Who won the election?
- 2) Who got the least number of votes?
- 3) What percent of people voted for Oliver?
- 4) What percent of people voted for either Luke or Oliver?
- 5) Which two candidates had about half the votes?

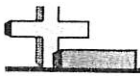
Answers

1. _____
2. _____
3. _____
4. _____
5. _____
6. _____
7. _____
8. _____
9. _____
10. _____

- 6) Which movie was the most popular?
- 7) Which movie was the least popular?
- 8) What percent of people said Pinocchio was their favorite?
- 9) What percent of people said either Pinocchio or Cars was their favorite?
- 10) Which two movies did about half the people say was their favorite?

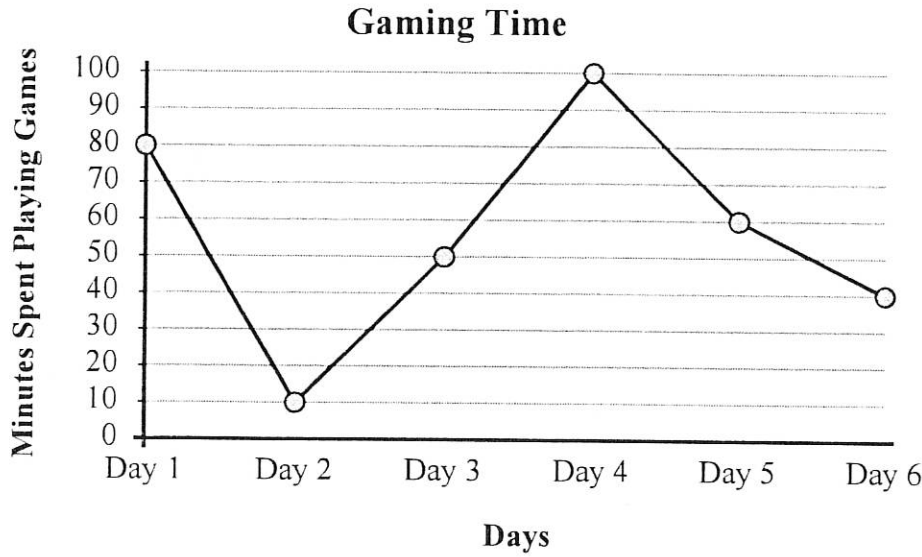
Favorite Disney Movie





The graph below shows the minutes Tommy spent playing video games. Use the graph to answer the questions.

Answers



1. _____
2. _____
3. _____
4. _____
5. _____
6. _____
7. _____
8. _____
9. _____
10. _____

- 1) Which day did he spend the most time playing games?
- 2) Which day did he spend the least time playing games?
- 3) From Day 2 to Day 3 did the amount of time he spent playing games increase or decrease?
- 4) How many minutes did he play on Day 6?
- 5) How many minutes did he play on Day 5?
- 6) Did he spend more time playing on Day 6 or Day 3?
- 7) Did he spend less time playing on Day 4 or Day 6?
- 8) What is the difference in the amount of time spent playing on Day 6 and the amount spent playing on Day 5?
- 9) What is the total time he spent playing?
- 10) On Day 4 he wanted to play at least 100 minutes. Did he get to or not?